




UTTAM SCHOOL FOR GIRLS

Grade: V Social Studies – Block 12 (People Who made a Difference) – Worksheet

Name- _____

Class/Sec- _____



1. Which of these is a Real life Hero and why?

2. Who was Martin Luther King Jr.? What did he do to be a real-life Hero? Write a paragraph of about 60-70 words.

3. Cut and paste a headline from the newspaper which according to you is an example of social evils prevalent in today's society. Express your views and give 1 suggestion on how you can eradicate the evil.



UTTAM SCHOOL FOR GIRLS

Grade: V Social Studies – Block 13 (Using Maps and Globe) – Worksheet

Name- _____

Class/Sec- _____

1. Differentiate :-

MAPS	GLOBE

2. (a) What are the three kinds of map? Explain.

(b) Reena wants to visit her friends who lives in the same city, but doesn't know the way to her house. Which kind of map will she use? Why?

3. Will a map which doesn't show all the elements be considered a true map? Why or why not?

4. Raj went to a map shop and purchased a map showing the climatic condition and temperature in different states of India in different seasons. Suggest 3 ways in which the map could be useful to Raj.



UTTAM SCHOOL FOR GIRLS

Grade: V Social Studies – Block 14 (Parallels and Meridians) – Worksheet

Name- _____

Class/Sec- _____


1. Draw a well labelled and coloured diagram of the Earth. Mark the following on it:-

(a) 5 important latitudes
hemispheres

(c) the meridian that divides the Earth into two equal

(b) Axis of the Earth

(d) Poles of the Earth



2. India follows the time according to the longitude at $82 \frac{1}{2}$ E longitude and the local time of the cities change as per their location. What is the difference between the Standard Time and the Local Time of a place? Explain.




UTTAM SCHOOL FOR GIRLS

Grade: V Social Studies – Block 15 (Motions of the Earth) – Worksheet

Name- _____

Class/Sec- _____

3. Draw a well labelled and coloured diagram to show the Revolution of the Earth and how the seasons change.



4. The sun sets earlier in winter and late in the summer season, due to which the daytime in summer is longer than the winter. Why?

5. If the North pole is tilted away from the sun, then -

a. What will be the season in northern hemisphere?

b. What will be the season in the northern hemisphere after the current season?

c. What will be the duration of daytime and night time in the southern hemisphere?




UTTAM SCHOOL FOR GIRLS

Grade: V Social Studies – Block 16 (Weather and Climate) – Worksheet

Name- _____

Class/Sec- _____

6. Draw a well-labelled and coloured diagram of the Earth showing the Heat-Zones of the Earth, and mark the following on it:-
- A country lying in each of the Heat Zone
 - The climate of the countries marked



7. Complete the following table:

Name of the Place	Climate	Factor Responsible for the climate
1. Delhi		
2. Mumbai		
3. Ladakh		
4. Jodhpur		

8. The tropic of cancer passes through the centre of India, making India fall into two different Heat-Zones. Do you think India's climate is affected by it? Why or why not?

9. Can a place located near the Equator have a similar climate as a place near the Poles? How?
