

UTTAM SCHOOL FOR GIRLS

GRADE: II

PRACTICE WORKSHEET

SUBJECT-MATHS

Name \_\_\_\_\_

Date \_\_\_\_\_

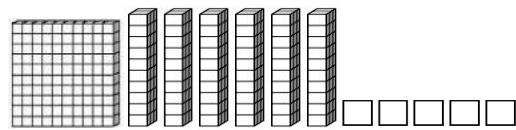
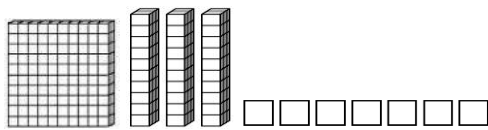
Q1. Write the following numbers in increasing and decreasing order.

120, 102, 118, 134


Increasing order \_\_\_\_\_

Decreasing order \_\_\_\_\_

Q2. Fill in the blank using  $<$ ,  $>$  or  $=$ .



Q3. Draw these numbers on the number line :-350, 375, 318, 260, 280



Q4. Fill in the missing numbers:-

720	740		780		
622	624			630	

**Q5. How much do you need to add to 885 to make 900?**

---