



UTTAM SCHOOL FOR GIRLS
Social Science – Grade IV
Block 12

Q1. Do you think life in Lakshadweep will be similar to the life in the Andaman and Nicobar Islands? Why?

Q2. Match the following:

- | | | |
|--------------------------------|-------|-----------------|
| A. Western Coastal Plains | _____ | Smaller Islands |
| B. Islands | _____ | Mumbai |
| C. Lakshadweep Islands | _____ | Bigger Islands |
| D. Andaman and Nicobar Islands | _____ | Kavaratti |

Q3. Fill in the blanks with appropriate words in the bracket.

- A. People in coastal plains eat _____. (rice, bajra roti)
- B. _____ clothes are worn by the people in coastal plains. (woollen, cotton)
- C. The climate in coastal plains is _____. (hot and humid, windy, cold)
- D. Andaman and Nicobar islands are _____ from the mainland. (closer, far)



UTTAM SCHOOL FOR GIRLS
Social Science – Grade IV
Block 13

Q1. How do those who have no homes, family and money celebrate festivals? How can we help them?

Q2. What is the difference between religious festivals and seasonal festivals? Give examples?

Religious Festivals	Seasonal Festivals

Q3. What things do you learn from celebrating festivals?



UTTAM SCHOOL FOR GIRLS
Social Science – Grade IV
Block 14

Q1. How do people remember/practice folk dances and folk songs that are so old?

Q2. Match the following:

- | | |
|-------------|-------------------|
| A. Bhatiali | _____ Punjab |
| B. Bhangra | _____ Gujarat |
| C. Bihu | _____ West Bengal |
| D. Kummi | _____ Assam |
| E. Garba | _____ Tamil Nadu |


Q3. Fill in the blanks.

- A. Women in Uttar Pradesh wear _____.
- B. Women in Punjab wear _____.
- C. Women in Gujarat wear _____.
- D. People in south wear _____.



UTTAM SCHOOL FOR GIRLS
Social Science – Grade IV
Block 16

1. Draw a well-labelled and coloured diagram showing the three layers of the soil.



2. Name any 3 methods of conserving the soil. Which out of them do you think is most effective and why?

3. What do you think will happen to the Earth and all the living beings if there were no soil left on the Earth?



UTTAM SCHOOL FOR GIRLS
Social Science – Grade IV
Block 17

1. Complete the following table:

Name of the forest	Found in	Special feature	Trees found
Deciduous			
		Can grow in salt water	
	Rajasthan		
			Pine, Fir
Evergreen			

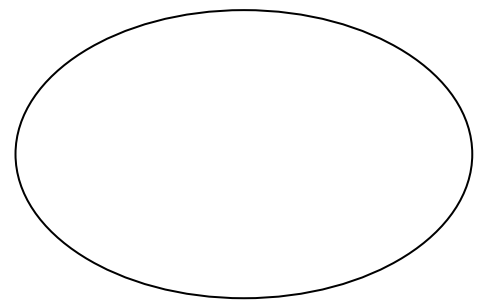
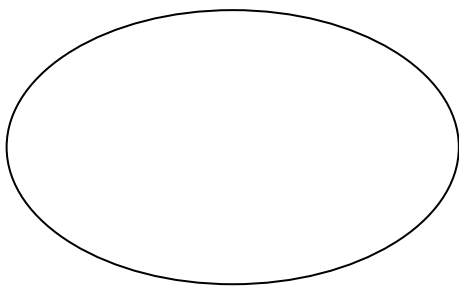
2. Name any three things for which both humans and animals dependent on the forest.

a. _____

b. _____

c. _____

3. Complete the following diagram:



**WAYS TO
PROTECT
ANIMALS**

