

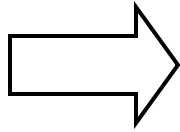


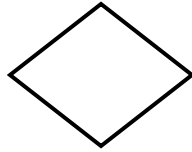
UTTAM SCHOOL FOR GIRLS

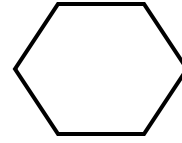
Grade III

Block -16, 18

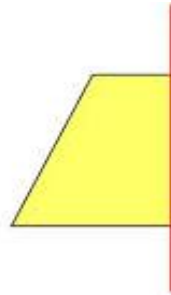

1. Draw and write the number of lines of symmetry in the following .







2. Draw the mirror images of of the given figures.



3. Create an AABCCAABCC pattern using shapes of your own choice.

4. Create a growing pattern using the given shape.



5. Observe and extend the following patten .

